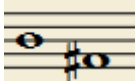
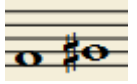


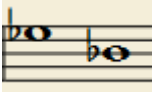
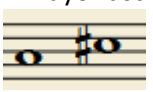
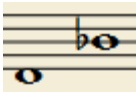
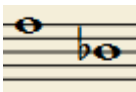


EJERCICIOS DE CONSTRUCCIÓN DE INTERVALOS (3): SOLUCIONES

1) Escribe la nota que falta para formar el intervalo indicado:

<p>4ª Justa descendente</p> 	<p>2ª aumentada asc.</p> 	<p>6ª menor descendente</p> 	<p>5ª aumentada asc.</p> 
<p>4ª justa descendente</p> 	<p>3ª mayor asc.</p> 	<p>6ª menor ascendente</p> 	<p>5ª justa descendente</p> 

2) Escribe la nota que falta para formar el intervalo indicado:

<p>3ª Mayor descendente</p> 	<p>3ª menor descendente</p> 	<p>4ª aumentada asc.</p> 	<p>2ª Mayor ascendente</p> 
<p>7ª Mayor ascendente</p> 	<p>2ª menor descendente</p> 	<p>5ª disminuida desc.</p> 	<p>6ª menor descendente</p> 